



## How to tell the time:


### 1. Write the time under the clocks:




*It's* \_\_\_\_\_




*It's* \_\_\_\_\_




*It's* \_\_\_\_\_



*It's* \_\_\_\_\_



*It's* \_\_\_\_\_



*It's* \_\_\_\_\_

### 2. Write the time in letters:

1. 10:30 \_\_\_\_\_

2. 17:50 \_\_\_\_\_

3. 19:20 \_\_\_\_\_

4. 02:00 \_\_\_\_\_

5. 20:15 \_\_\_\_\_

6. 07: 45 \_\_\_\_\_

7. 13:25 \_\_\_\_\_

### 3. Write the time in numbers:

1. It's twenty to three \_\_\_\_\_ 2. It's ten past eight \_\_\_\_\_

3. It's a quarter to nine \_\_\_\_\_ 4. It's five o'clock \_\_\_\_\_

5. It's five past six \_\_\_\_\_ 6. It's a quarter past seven \_\_\_\_\_

7. It's half past four \_\_\_\_\_