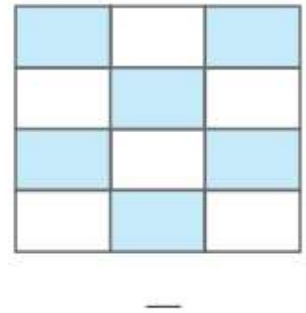
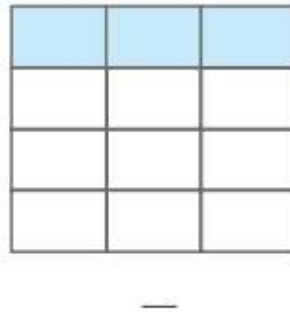
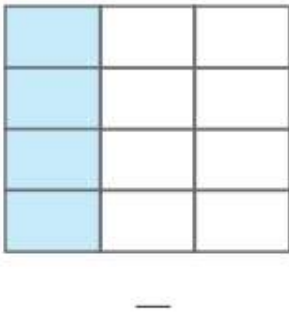
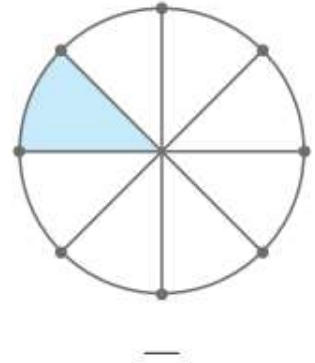
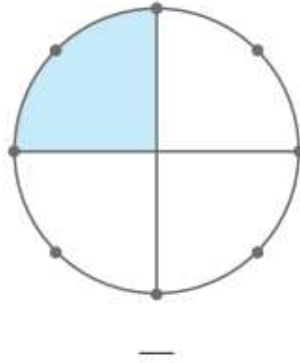
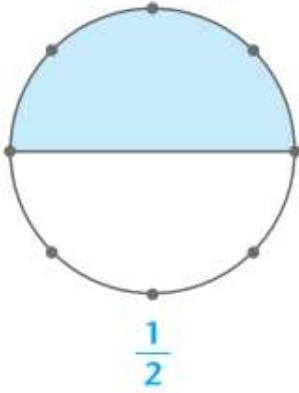


# Ο Ν Ο Μ Α .....

Ενότητα 23α



Βοήθησε την Ελένη να γράψει το κλάσμα που δηλώνει το χρωματισμένο μέρος κάθε σχήματος:



Χρωμάτισε όσο λέει το κλάσμα:

