

Ο Ν Ο Μ Α

Ενότητα 19

Γράφω σε ευρώ τα χρηματικά ποσά.



α) €



β) €



γ) €



δ) €



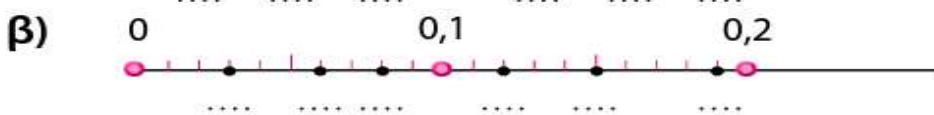
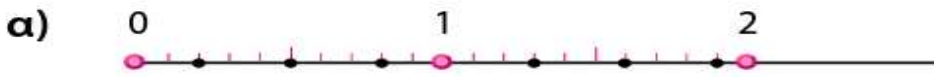
ε) €



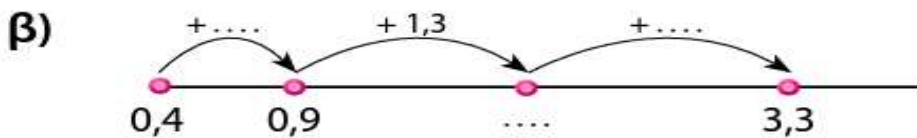
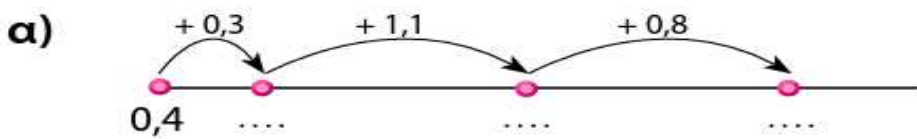
στ) €



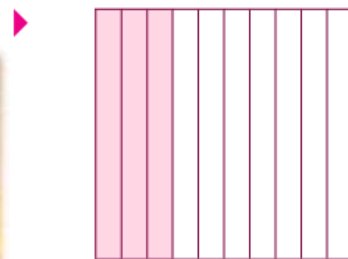
Συμπληρώνω τα κενά στις αριθμογραμμές.




Συμπληρώνω τα κενά.



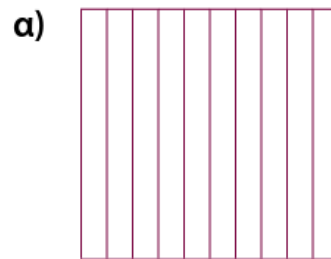
Χρωματίζω κατάλληλα, ώστε με τη βοήθεια των αντίστοιχων σχημάτων να βρω τα αποτελέσματα.



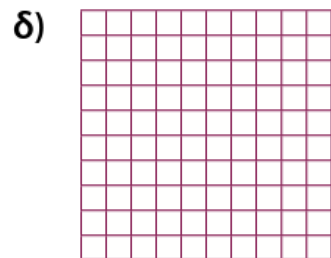
$$1 - 0,3 = 0,7$$



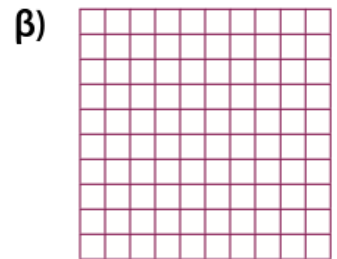
$$1 - 0,76 = \dots\dots$$



$$1 - 0,1 = \dots\dots$$



$$2 - 1,23 = \dots\dots$$



$$1 - 0,57 = \dots\dots$$

