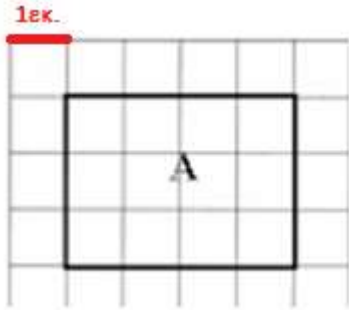


Όνομα: .....

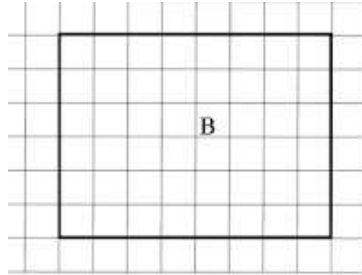
Ημερομηνία: .....

Β' ΤΑΞΗ  
ΜΑΘΗΜΑΤΙΚΑ  
Δάσκαλος: Αναστασιάδης Χαράλαμπος

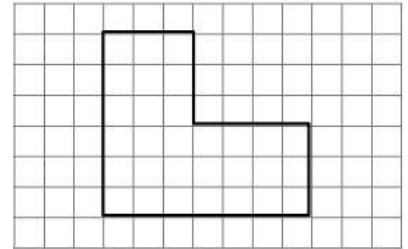
1. Βρίσκω την περίμετρο των σχημάτων:



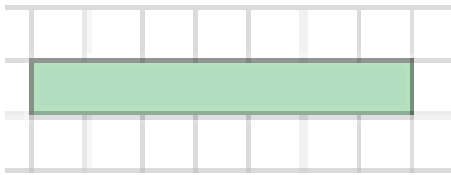
Π=.....



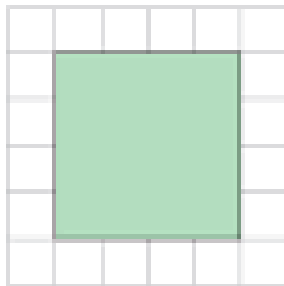
Π=.....



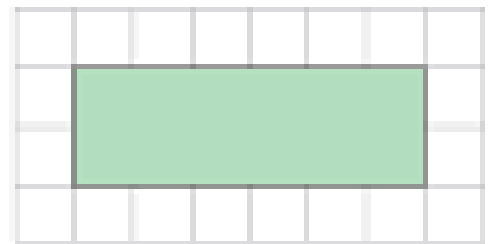
Π=.....



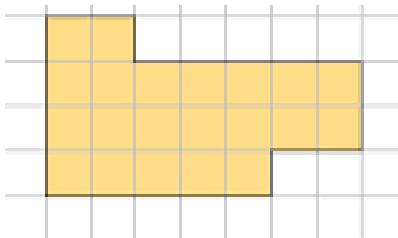
Π=.....



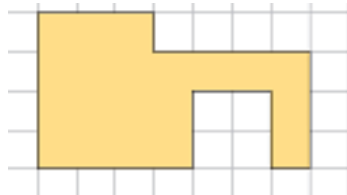
Π=.....



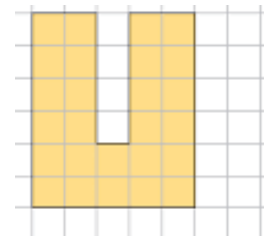
Π=.....



Π=.....

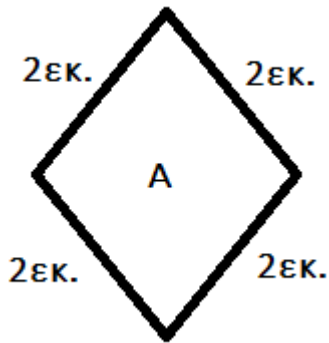


Π=.....

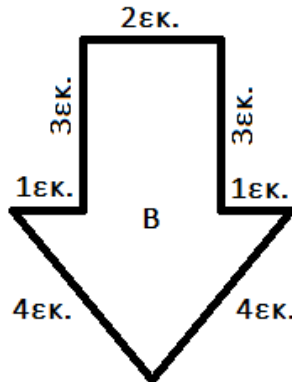


Π=.....

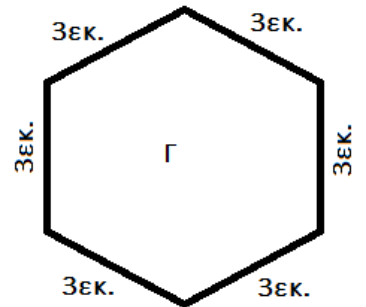
2. Βρίσκω την περίμετρο των σχημάτων:



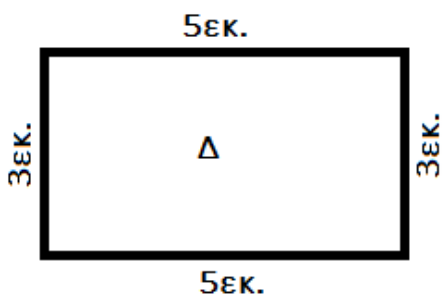
$$\Pi_A = \dots + \dots + \dots + \dots = \dots$$



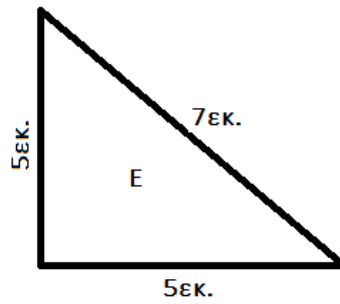
$$\Pi_B = \dots + \dots + \dots + \dots + \dots + \dots + \dots = \dots$$



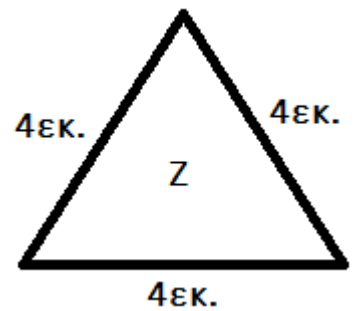
$$\Pi_\Gamma = \dots + \dots + \dots + \dots + \dots + \dots = \dots$$



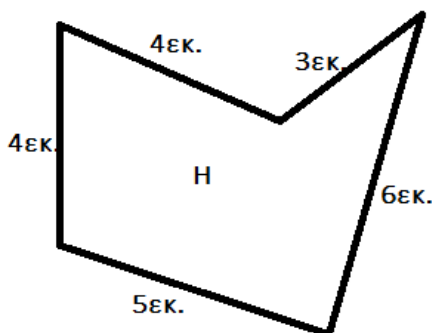
$$\Pi_\Delta = \dots + \dots + \dots + \dots = \dots$$



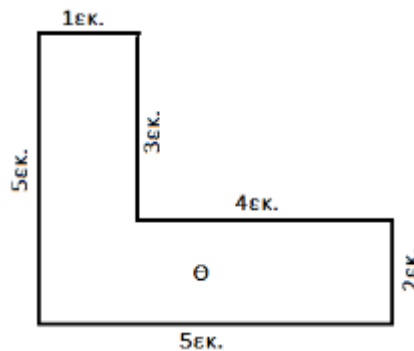
$$\Pi_E = \dots + \dots + \dots = \dots$$



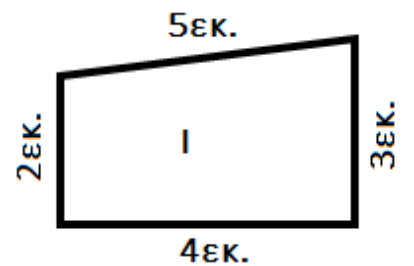
$$\Pi_Z = \dots + \dots + \dots = \dots$$



$$\Pi_H = \dots + \dots + \dots + \dots + \dots = \dots$$



$$\Pi_\Theta = \dots + \dots + \dots + \dots + \dots + \dots = \dots$$



$$\Pi_I = \dots + \dots + \dots + \dots = \dots$$